



Fill in the names of the provinces on the map:

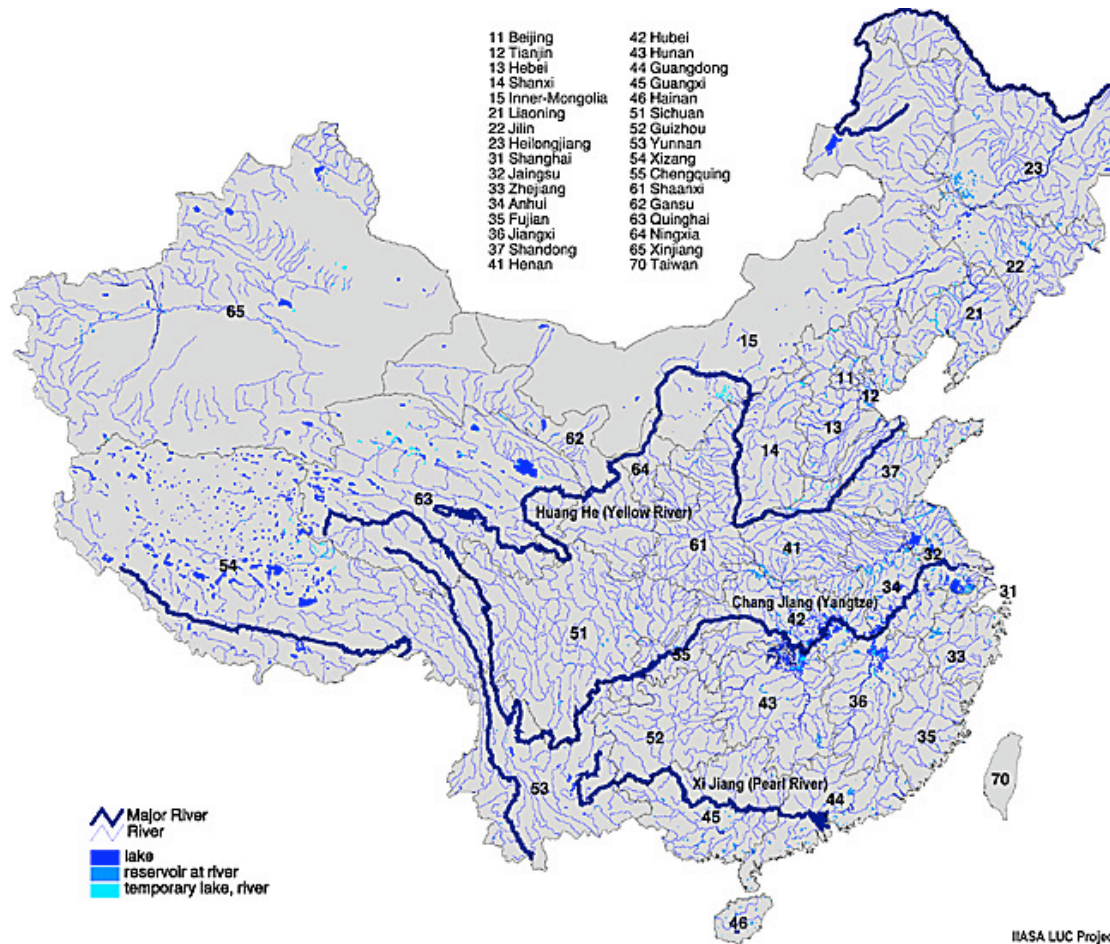
Anhui  
Fujian  
Chongqing  
Gansu  
Guizhou  
Guangdong  
Guangxi  
Hainan  
Hebei  
Henan

Heilongjiang  
Hubei  
Hunan  
Inner Mongolia  
Jiangsu  
Jiangxi  
Jilin  
Liaoning  
Ningxia  
Qinghai

Shandong  
Shanxi  
Shaanxi  
Sichuan  
Tibet  
Xinjiang  
Yunnan  
Zhejiang

Indicate the location of the following large cities on the map

Chengdu  
Chongqing  
Harbin  
Beijing  
Wuhan  
Shanghai  
Tianjin  
Xi'an  
Guangzhou  
Kunming

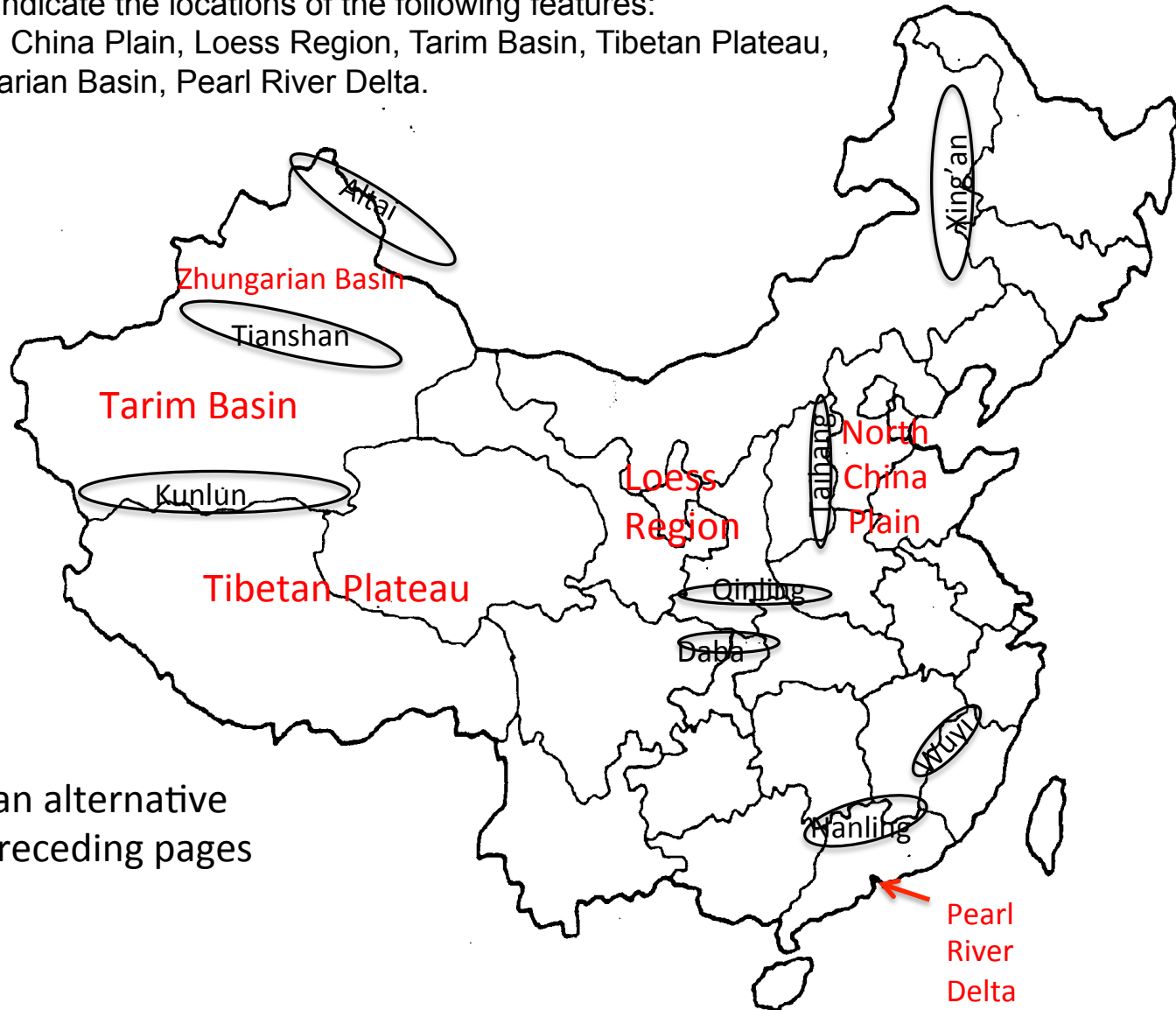


Now indicate on the waterways map the following rivers: Sungari, Liao, Yellow, Huai, Yangtze (Chang), West (Xi), Red (Hong), Mekong (Lancang), Salween (Nu).

On this same map, sketch in the boundaries between the agricultural and pastoral regions, and between the wet-rice and dry-grain farming regions. (you get a hundred km or so leeway either way)

Name the following mountain ranges, indicated by ovals on the map:  
Xing'an, Wuyi, Kunlun, Taihang, Daba, Nanling, Altai, Qinling, Tianshan

Also indicate the locations of the following features:  
North China Plain, Loess Region, Tarim Basin, Tibetan Plateau,  
Zungarian Basin, Pearl River Delta.



Note: this is an alternative  
to the two preceding pages

Name:

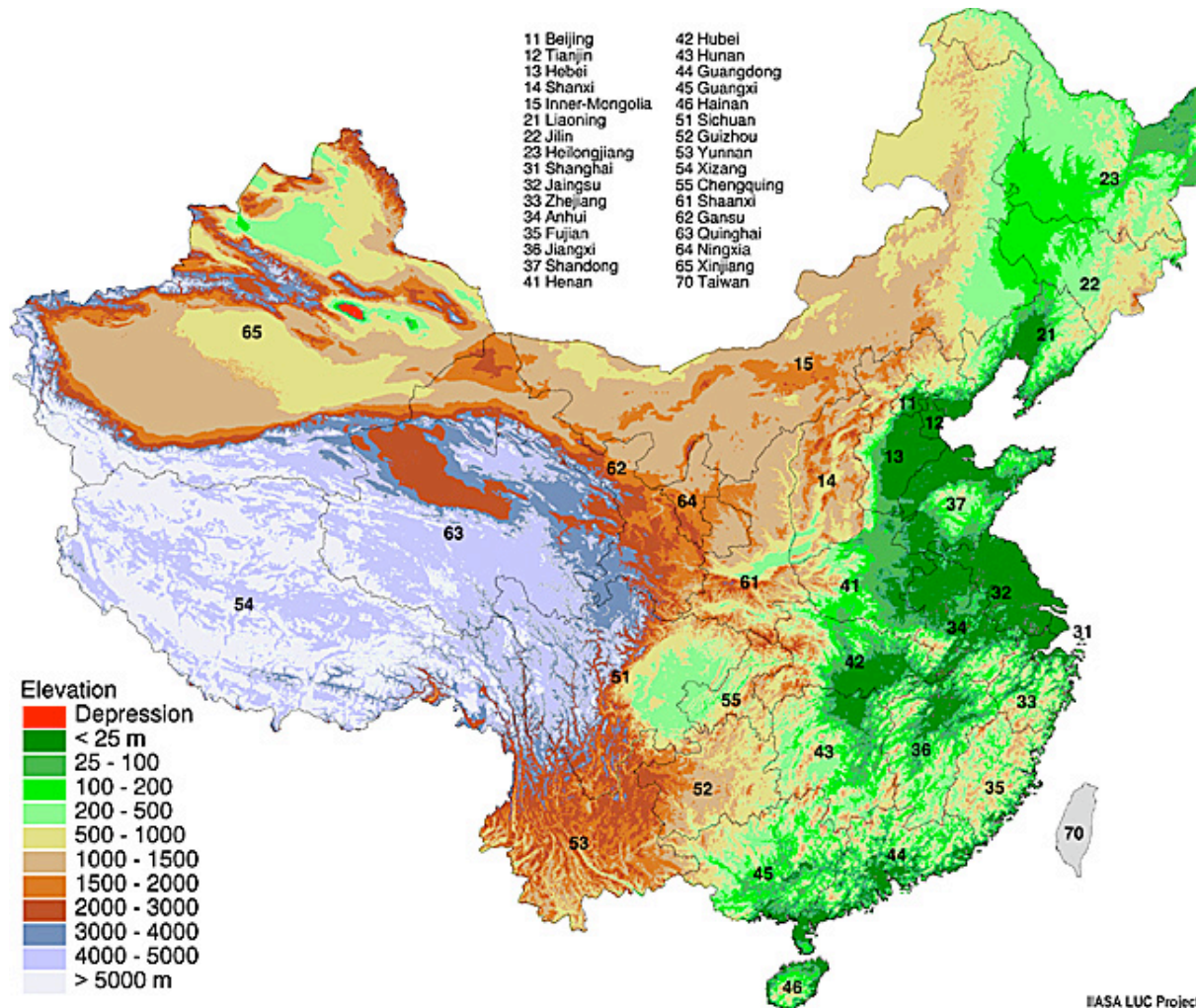
Part V: Label Each of the Rivers listed below

The map shows the following rivers and their associated photos:

- Heilong or Amur**: Photo of a wide river valley.
- Songari or Songhua**: Photo of a river winding through a green landscape.
- Liao**: Photo of a river with a large dam.
- Huang or Yellow**: Photo of a river with a large dam.
- Wei**: Photo of a river flowing through a mountainous area.
- Huai**: Photo of a river flowing through a valley.
- Chang or Yangtze**: Photo of a river flowing through a valley.
- Han**: Photo of a river flowing through a valley.
- Xi, West, or Pearl**: Photo of a river flowing through a valley.
- Nu or Salween**: Photo of a river flowing through a valley.
- Lancang or Mekong**: Photo of a river flowing through a valley.
- Yarlung Tsangpo**: Photo of a river flowing through a valley.
- Taiwan**: Photo of a city skyline.

- Wei
- Huai
- Huang (Yellow)
- Sungari
- West (Pearl)
- Liao
- Lancang (Mekong)
- Han
- Nu (Salween)

“Bonus”:  
Yarlung Tsanpo  
Amur (Heilong)



On the relief map, indicate the following mountain ranges: Xing'an, Taihang, Qinling, Daba, Wuyi, Nanling, Kunlun, Altai, Tianshan

On this same map, indicate the location of the following features: North China Plain, Loess Region, Zungarian Basin, Tarim Basin, Tibetan Plateau, Pearl River Delta.

Now place the following dynasties in order (they will be scrambled for the actual quiz), giving the approximate dates of the starred\* dynasties:

Shang

Zhou\* 1047-250 BCE

Qin

Han\* 206 BCE-220 C.E.

Wei-Jin

Sui

Tang\* 618-906 C.E.

Song\* 960-1280 C.E.

Yuan

Ming\* 1368-1644 C.E.

Qing\* 1644-1911 C.E.

Republic of China\* 1911-1949

People's Republic of China\* 1949-

Now place the following events in PRC history in order, and give approximate dates (one to two years' leeway, depending on the event and its duration): Founding of the PRC, Land Reform, Collectivization, Great Leap Forward, Period of Collective Agriculture, Cultural Revolution, Beginning of Reforms, Tian'anmen Massacre of June 4, Logging Ban, Olympic Games.

# Events in PRC history

- PRC founded 1949
- Land Reform 1950-53
- Collective agriculture 1956-82
- Great Leap Forward and famine 1958-61
- Great Proletarian Cultural Revolution 1966-76 (or 66-69)
- Death of Mao Zedong 1976
- Deng Xiaoping's regime 1979-97
- Reform and Opening 1979-
- Planned birth program 1980-
- Tian'anmen massacre 1989
- Southwest Logging ban 1998-
- Hu Jintao's regime 2002-2012
- Beijing Olympics 2008
- Xi Jinping's regime 2012-